

















Put the first number in the sum in your head, or point to it on your number line. Count on with the second number in the sum to find your answer.

COUNTING ON WITH FINGERS

Write the sum for each number sentence.

$8 + $  $ = $ <input type="text"/>	$7 + $  $ = $ <input type="text"/>
$6 + $  $ = $ <input type="text"/>	$8 + $  $ = $ <input type="text"/>
$9 + $  $ = $ <input type="text"/>	$6 + $  $ = $ <input type="text"/>
$7 + $  $ = $ <input type="text"/>	$9 + $  $ = $ <input type="text"/>
$6 + $  $ = $ <input type="text"/>	$6 + $  $ = $ <input type="text"/>
$8 + $  $ = $ <input type="text"/>	$8 + $  $ = $ <input type="text"/>
$11 + $  $ = $ <input type="text"/>	$7 + $  $ = $ <input type="text"/>
$10 + $  $ = $ <input type="text"/>	$6 + $  $ = $ <input type="text"/>