


Complete the number sentences using the five frames to show the different ways to make 5. Use the coloured counters to help you.


The first one has been done for you.




$$5 = 5 + 0$$




$$5 = \_ + \_$$




$$5 = \_ + \_$$



$$5 = \_ + \_$$



$$5 = \_ + \_$$



$$5 = \_ + \_$$