


Solve these subtraction problems

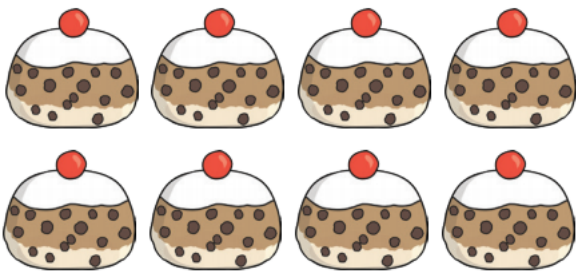


$7 - 2 = \underline{\quad}$


Cross off the number that you are taking away as in the example with the green dots above.




$$\boxed{3} - \boxed{2} = \boxed{\quad}$$




$$\boxed{8} - \boxed{4} = \boxed{\quad}$$



$$\boxed{7} - \boxed{1} = \boxed{\quad}$$



$$\boxed{5} - \boxed{5} = \boxed{\quad}$$



$$\boxed{9} - \boxed{3} = \boxed{\quad}$$