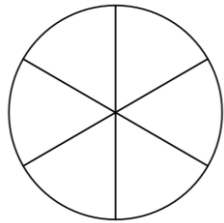
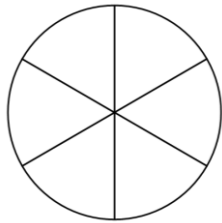


Name _____

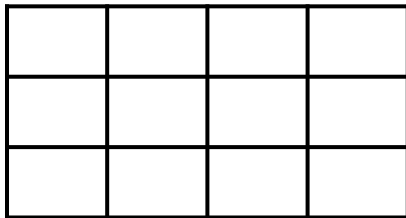


- 1 Shade $\frac{2}{6}$ of the circle. Shade $\frac{1}{3}$ of the circle.



2 marks

- 2 Shade $\frac{1}{2}$ of the shape.



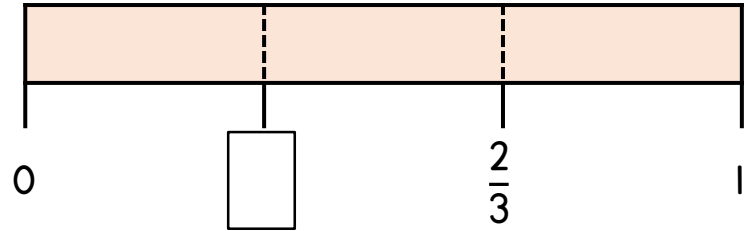
1 mark

Complete the equivalent fraction.

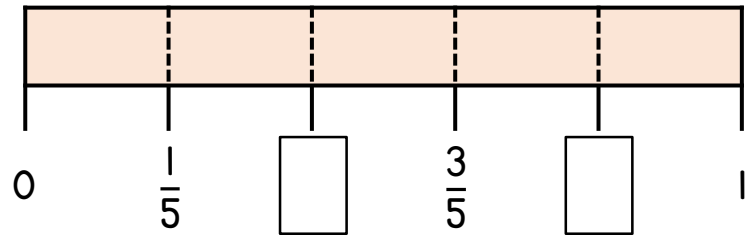
$$\frac{1}{2} = \frac{\square}{12}$$

1 mark

- 3 Complete the missing boxes.



1 mark



1 mark

Compare using $<$, $>$ or $=$

$$\frac{3}{5} \quad \bigcirc \quad \frac{4}{5}$$

$$\frac{1}{3} \quad \bigcirc \quad \frac{1}{5}$$

2 marks

- 4 Amy, Zac and Harry are running a race.

Zac has run $\frac{1}{2}$ of the race.

Amy has run $\frac{3}{4}$ of the race.

Harry has run $\frac{1}{4}$ of the race.

Who has run the shortest distance?

Explain your answer.

- 5 Use the ten frame to help you complete the number sentences.



$$\frac{2}{10} + \frac{\square}{10} = \frac{10}{10}$$

$$1 - \frac{2}{10} = \frac{\square}{10}$$

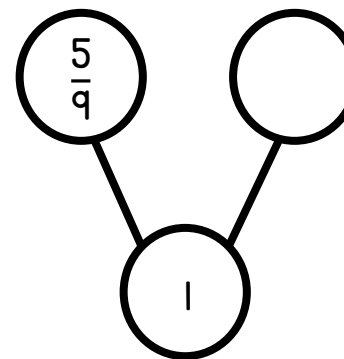
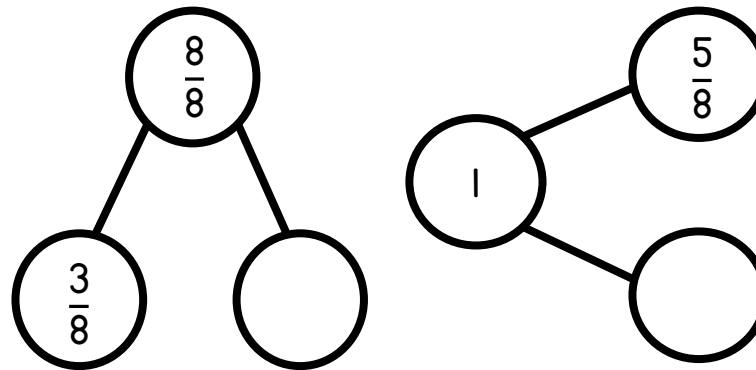


2 marks



2 marks

- 6 Complete the part-whole models.



3 marks

Circle how confident you feel with fractions.

1

2

3

4

5

Not
confident

Very
confident